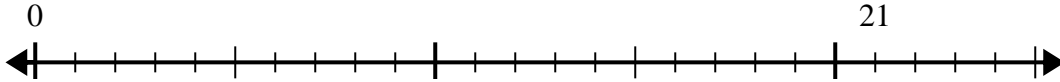


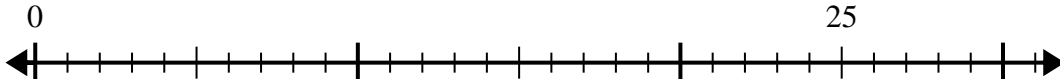


Use the number line to solve the division problem.

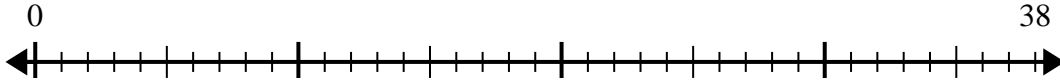
1) $21 \div 5 =$
0



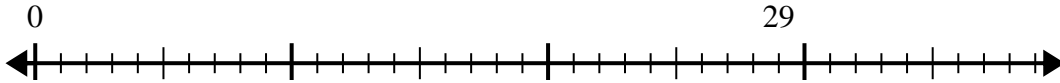
2) $25 \div 6 =$
0



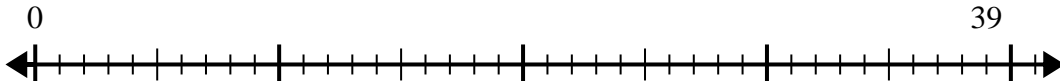
3) $38 \div 8 =$
0



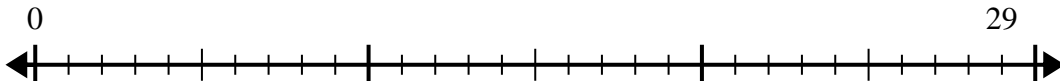
4) $29 \div 7 =$
0



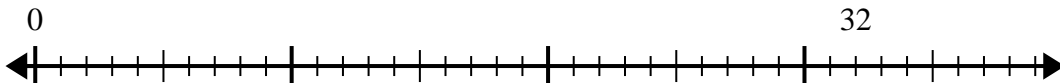
5) $39 \div 5 =$
0



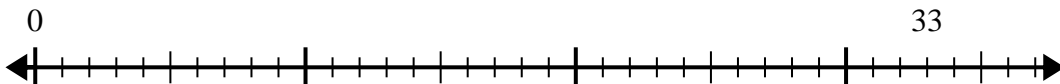
6) $29 \div 4 =$
0



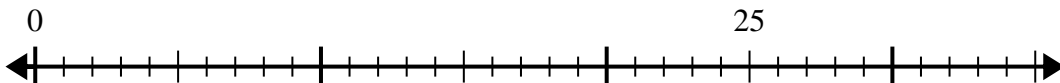
7) $32 \div 6 =$
0



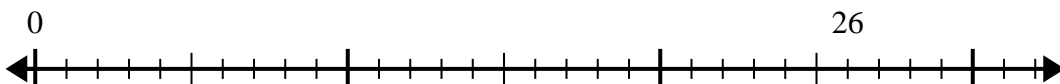
8) $33 \div 4 =$
0



9) $25 \div 4 =$
0



10) $26 \div 7 =$
0



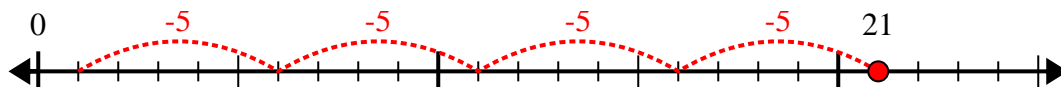
Answers

- 1. _____
- 2. _____
- 3. _____
- 4. _____
- 5. _____
- 6. _____
- 7. _____
- 8. _____
- 9. _____
- 10. _____

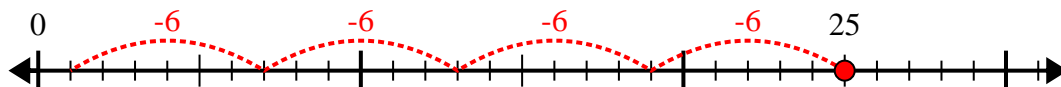


Use the number line to solve the division problem.

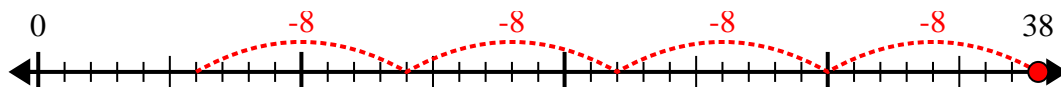
1) $21 \div 5 =$



2) $25 \div 6 =$



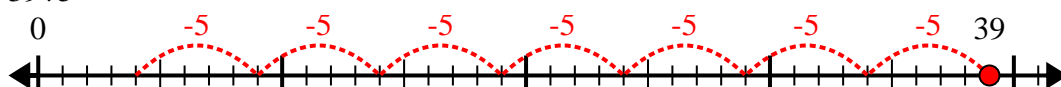
3) $38 \div 8 =$



4) $29 \div 7 =$



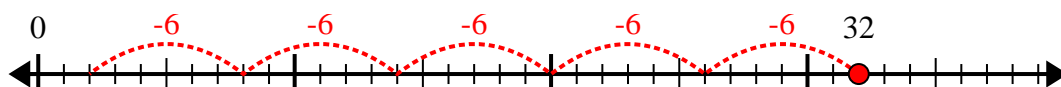
5) $39 \div 5 =$



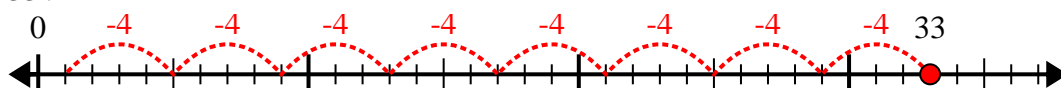
6) $29 \div 4 =$



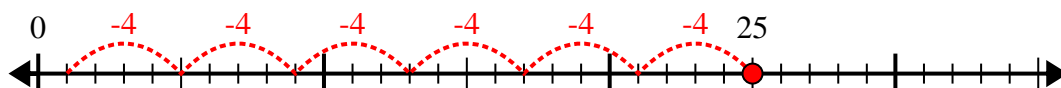
7) $32 \div 6 =$



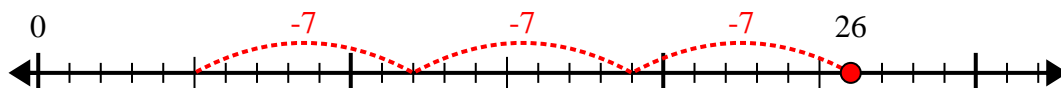
8) $33 \div 4 =$



9) $25 \div 4 =$



10) $26 \div 7 =$



Answers

1. 4r1

2. 4r1

3. 4r6

4. 4r1

5. 7r4

6. 7r1

7. 5r2

8. 8r1

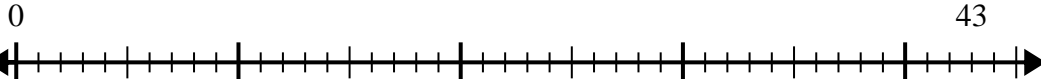
9. 6r1

10. 3r5

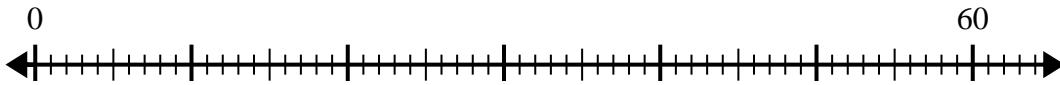


Use the number line to solve the division problem.

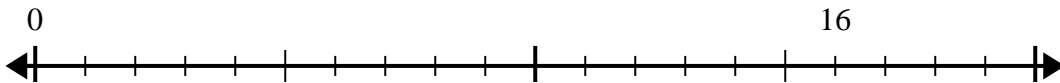
1) $43 \div 5 =$



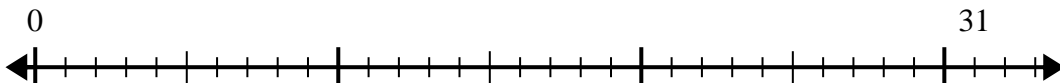
2) $60 \div 7 =$



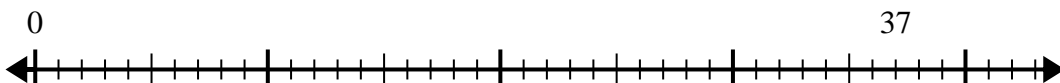
3) $16 \div 5 =$



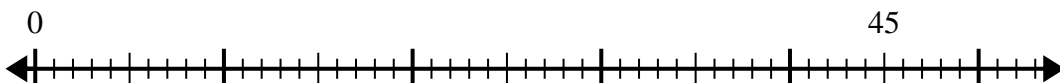
4) $31 \div 4 =$



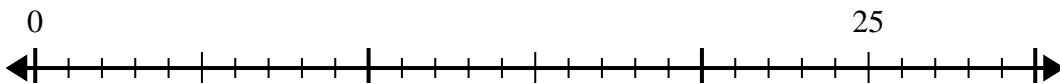
5) $37 \div 7 =$



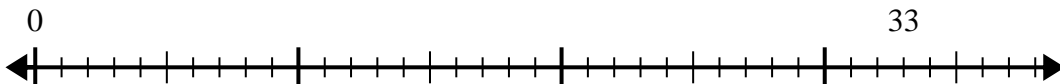
6) $45 \div 8 =$



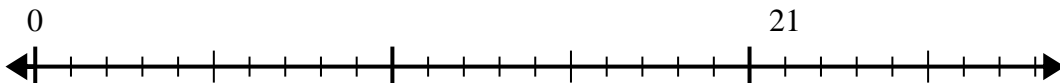
7) $25 \div 4 =$



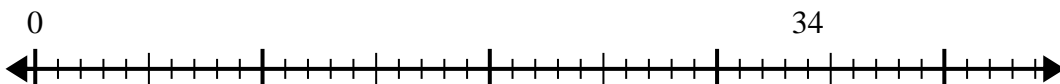
8) $33 \div 5 =$



9) $21 \div 4 =$



10) $34 \div 4 =$



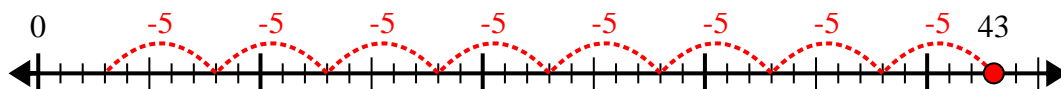
Answers

1. _____
2. _____
3. _____
4. _____
5. _____
6. _____
7. _____
8. _____
9. _____
10. _____



Use the number line to solve the division problem.

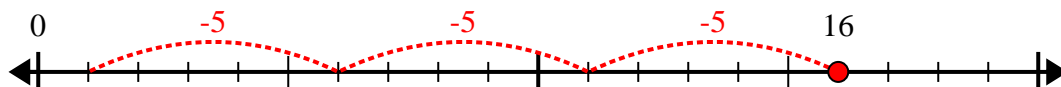
1) $43 \div 5 =$



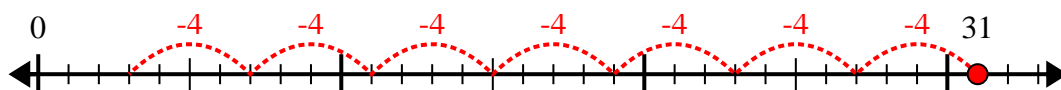
2) $60 \div 7 =$



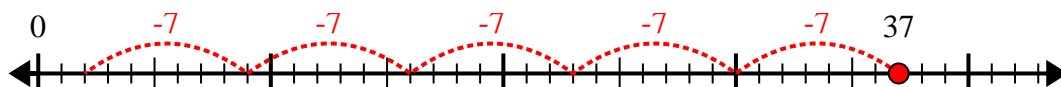
3) $16 \div 5 =$



4) $31 \div 4 =$



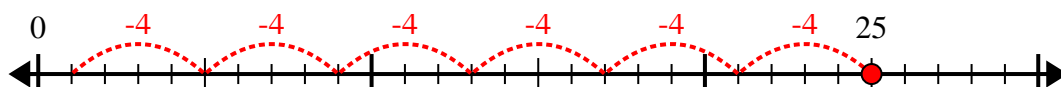
5) $37 \div 7 =$



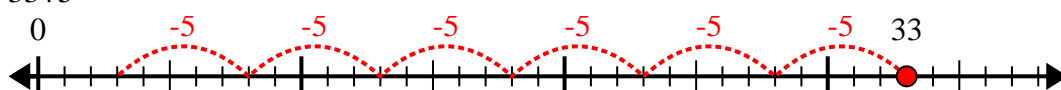
6) $45 \div 8 =$



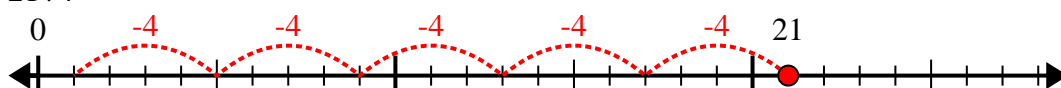
7) $25 \div 4 =$



8) $33 \div 5 =$



9) $21 \div 4 =$



10) $34 \div 4 =$



Answers

1. 8r3

2. 8r4

3. 3r1

4. 7r3

5. 5r2

6. 5r5

7. 6r1

8. 6r3

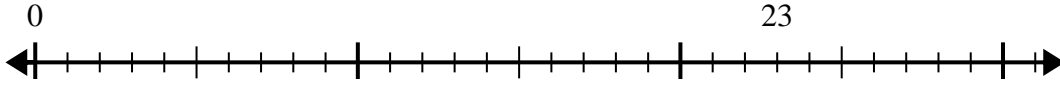
9. 5r1

10. 8r2

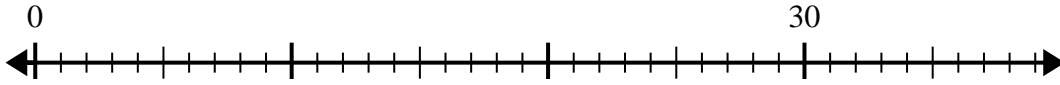


Use the number line to solve the division problem.

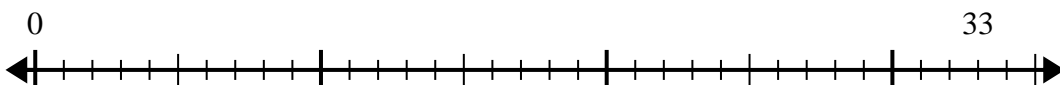
1) $23 \div 5 =$
0



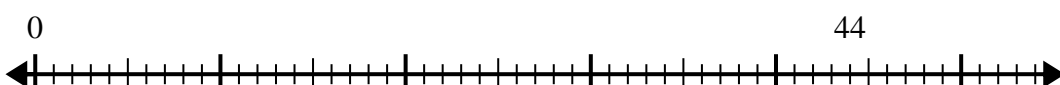
2) $30 \div 4 =$
0




3) $33 \div 6 =$
0




4) $44 \div 6 =$
0



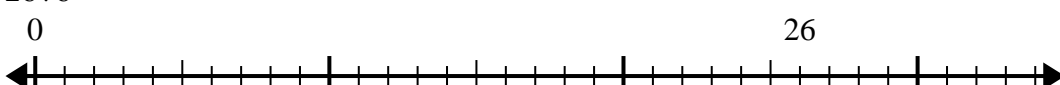
5) $50 \div 6 =$
0



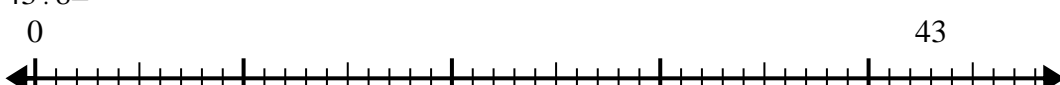
6) $62 \div 8 =$
0



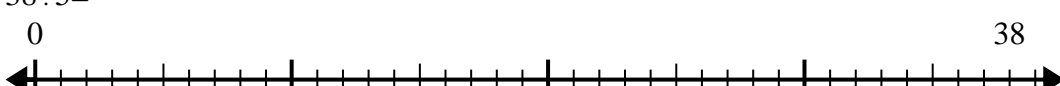
7) $26 \div 6 =$
0




8) $43 \div 8 =$
0



9) $38 \div 5 =$
0



10) $15 \div 4 =$
0



Answers

- 1. _____
- 2. _____
- 3. _____
- 4. _____
- 5. _____
- 6. _____
- 7. _____
- 8. _____
- 9. _____
- 10. _____

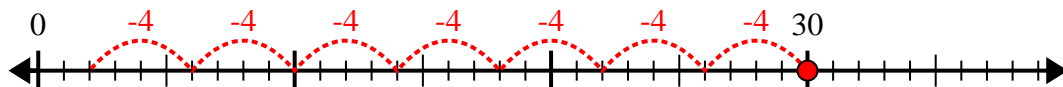


Use the number line to solve the division problem.

1) $23 \div 5 =$



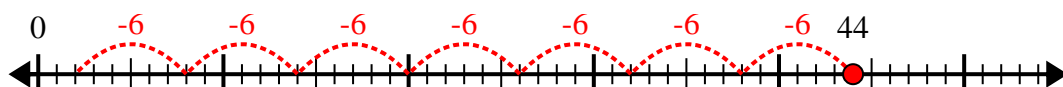
2) $30 \div 4 =$



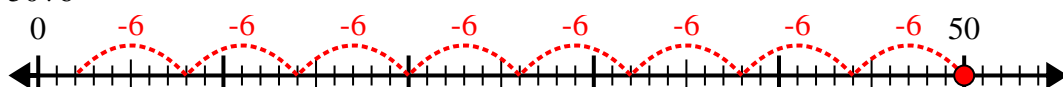
3) $33 \div 6 =$



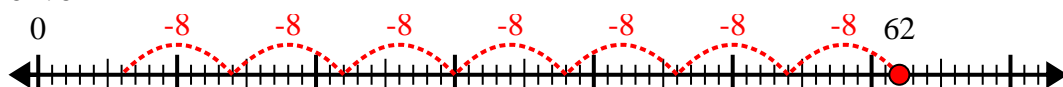
4) $44 \div 6 =$



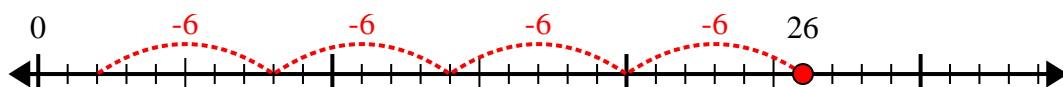
5) $50 \div 6 =$



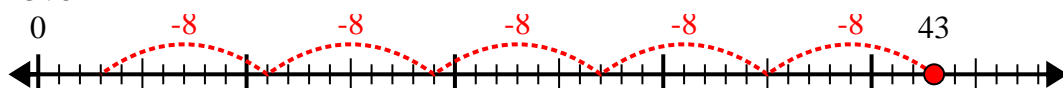
6) $62 \div 8 =$



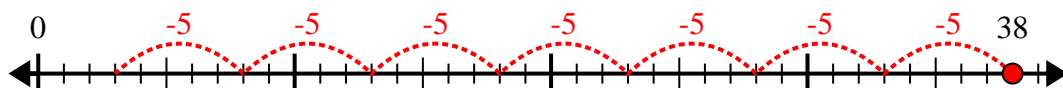
7) $26 \div 6 =$



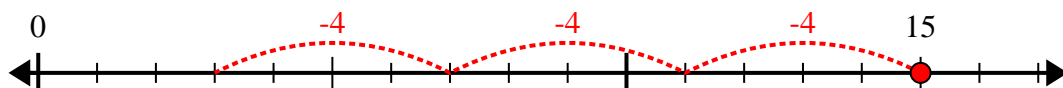
8) $43 \div 8 =$



9) $38 \div 5 =$



10) $15 \div 4 =$



Answers

1. 4r3

2. 7r2

3. 5r3

4. 7r2

5. 8r2

6. 7r6

7. 4r2

8. 5r3

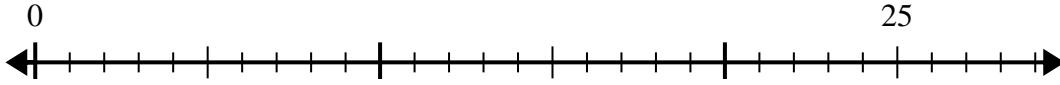
9. 7r3

10. 3r3

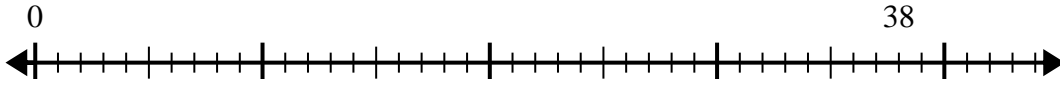


Use the number line to solve the division problem.

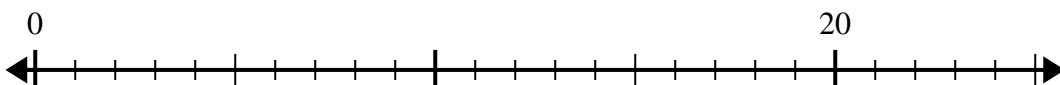
1) $25 \div 6 =$
0



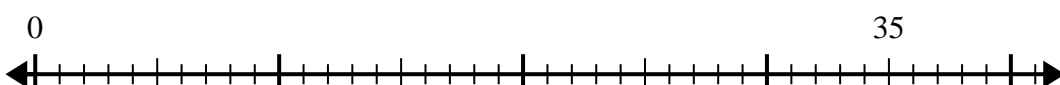
2) $38 \div 7 =$
0



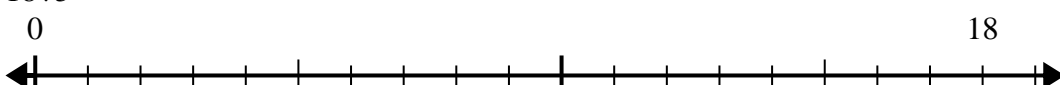
3) $20 \div 6 =$
0



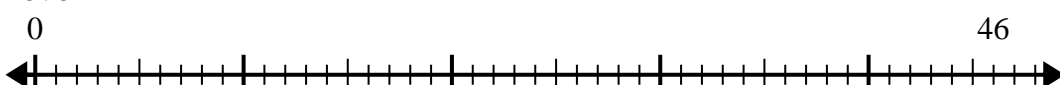
4) $35 \div 6 =$
0



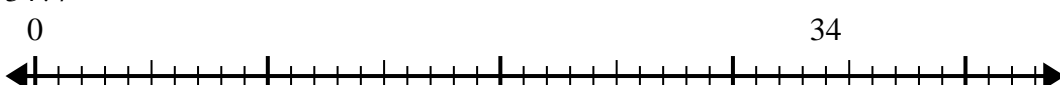
5) $18 \div 5 =$
0



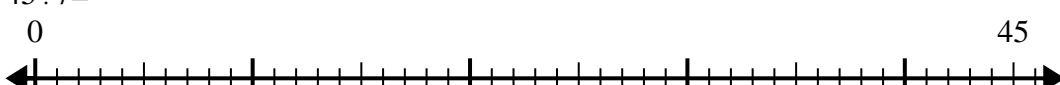
6) $46 \div 6 =$
0



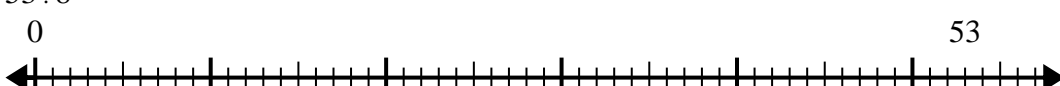
7) $34 \div 7 =$
0



8) $45 \div 7 =$
0



9) $53 \div 8 =$
0



10) $50 \div 6 =$
0



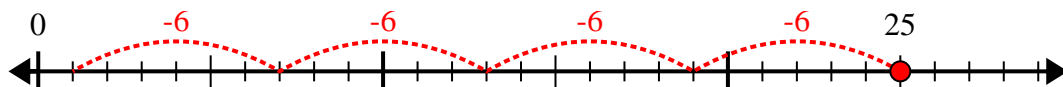
Answers

- 1. _____
- 2. _____
- 3. _____
- 4. _____
- 5. _____
- 6. _____
- 7. _____
- 8. _____
- 9. _____
- 10. _____



Use the number line to solve the division problem.

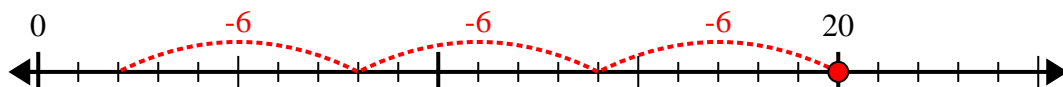
1) $25 \div 6 =$



2) $38 \div 7 =$



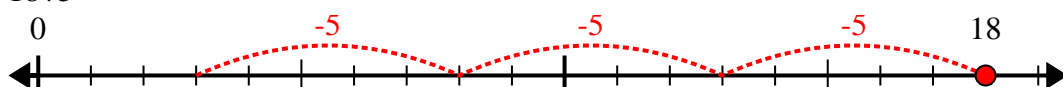
3) $20 \div 6 =$



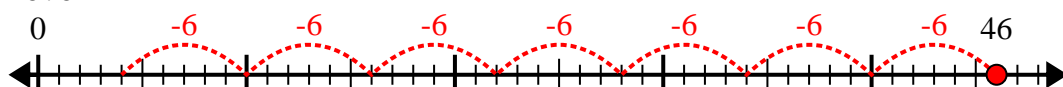
4) $35 \div 6 =$



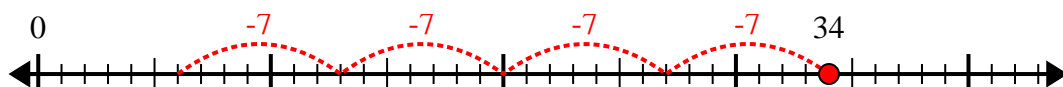
5) $18 \div 5 =$



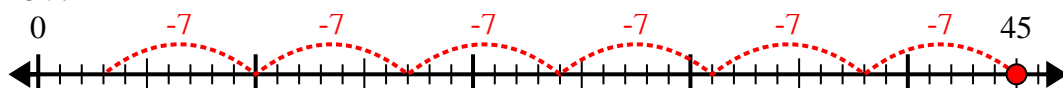
6) $46 \div 6 =$



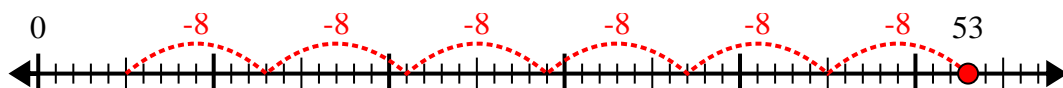
7) $34 \div 7 =$



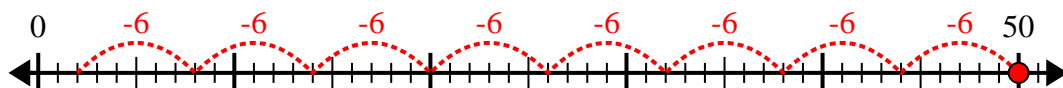
8) $45 \div 7 =$



9) $53 \div 8 =$



10) $50 \div 6 =$



Answers

1. 4r1

2. 5r3

3. 3r2

4. 5r5

5. 3r3

6. 7r4

7. 4r6

8. 6r3

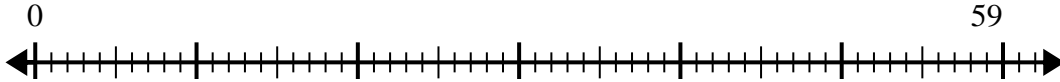
9. 6r5

10. 8r2

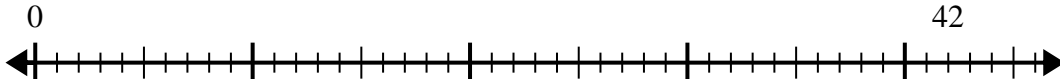


Use the number line to solve the division problem.

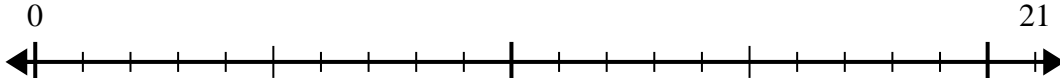
1) $59 \div 7 =$
0



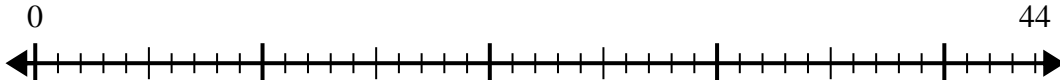
2) $42 \div 5 =$
0



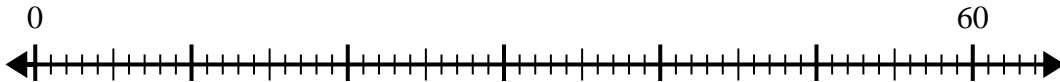
3) $21 \div 4 =$
0



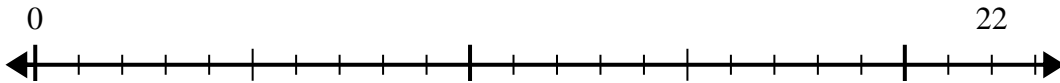
4) $44 \div 7 =$
0



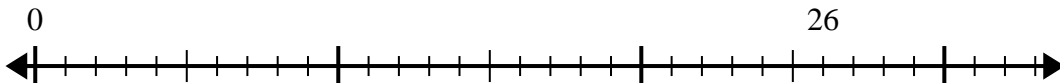
5) $60 \div 8 =$
0



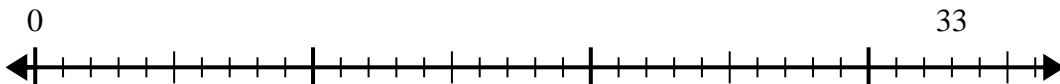
6) $22 \div 5 =$
0



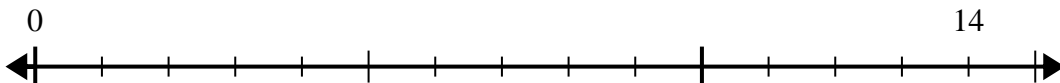
7) $26 \div 4 =$
0



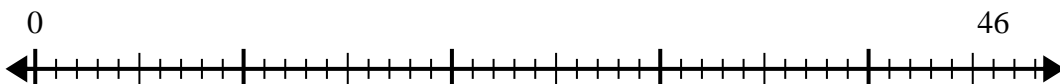
8) $33 \div 8 =$
0



9) $14 \div 4 =$
0



10) $46 \div 6 =$
0



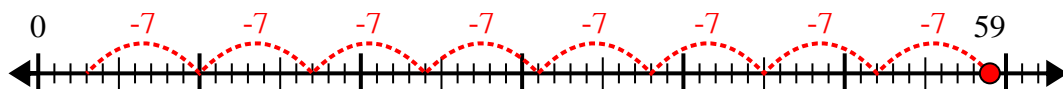
Answers

- 1. _____
- 2. _____
- 3. _____
- 4. _____
- 5. _____
- 6. _____
- 7. _____
- 8. _____
- 9. _____
- 10. _____

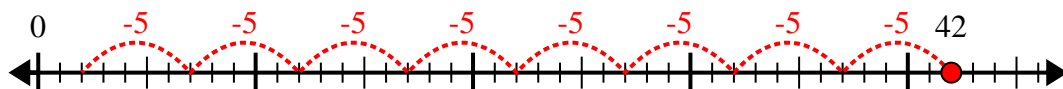


Use the number line to solve the division problem.

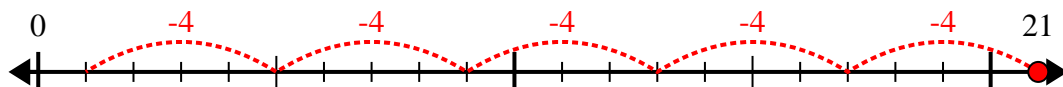
1) $59 \div 7 =$



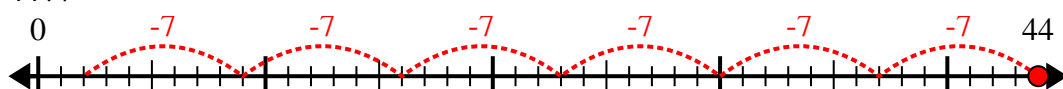
2) $42 \div 5 =$



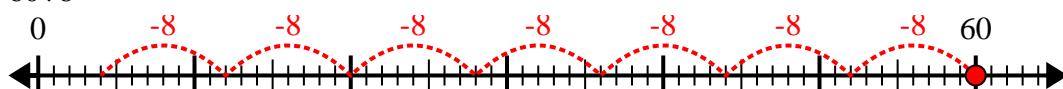
3) $21 \div 4 =$



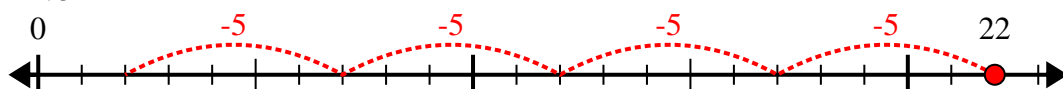
4) $44 \div 7 =$



5) $60 \div 8 =$



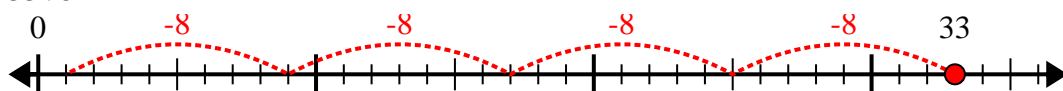
6) $22 \div 5 =$



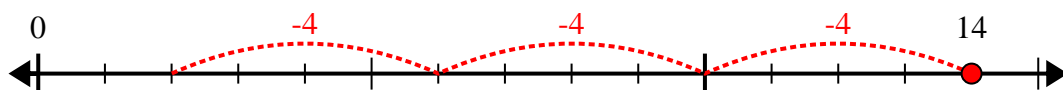
7) $26 \div 4 =$



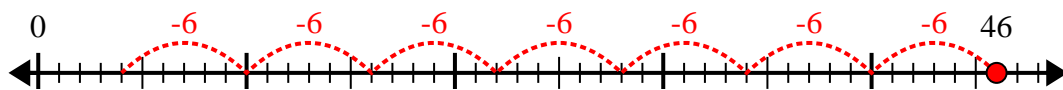
8) $33 \div 8 =$



9) $14 \div 4 =$



10) $46 \div 6 =$



Answers

1. 8r3

2. 8r2

3. 5r1

4. 6r2

5. 7r4

6. 4r2

7. 6r2

8. 4r1

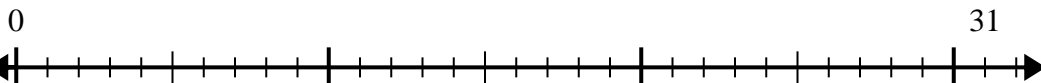
9. 3r2

10. 7r4

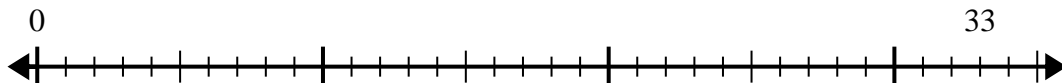


Use the number line to solve the division problem.

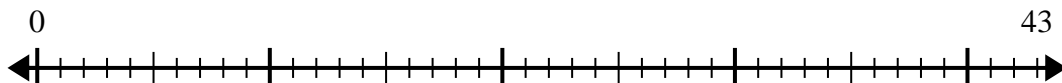
1) $31 \div 6 =$



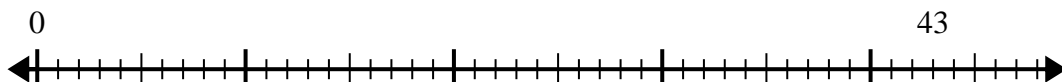
2) $33 \div 4 =$



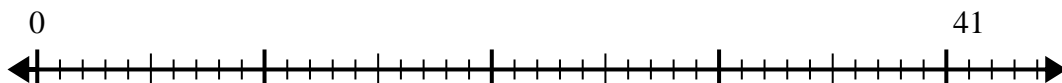
3) $43 \div 7 =$



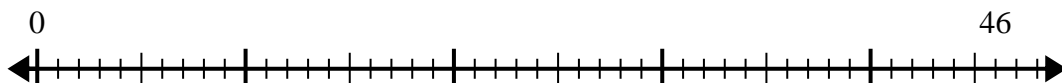
4) $43 \div 5 =$



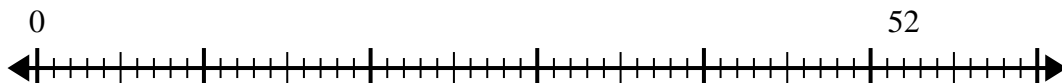
5) $41 \div 8 =$



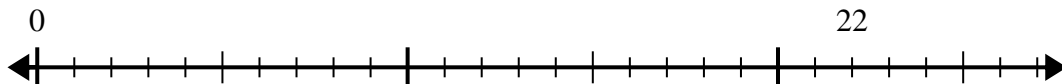
6) $46 \div 6 =$



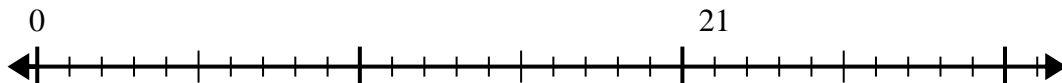
7) $52 \div 6 =$



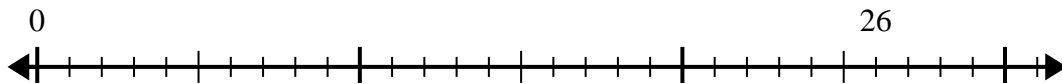
8) $22 \div 4 =$



9) $21 \div 5 =$



10) $26 \div 4 =$



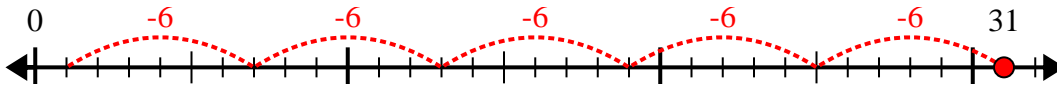
Answers

- 1. _____
- 2. _____
- 3. _____
- 4. _____
- 5. _____
- 6. _____
- 7. _____
- 8. _____
- 9. _____
- 10. _____

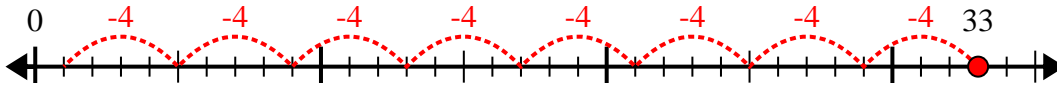


Use the number line to solve the division problem.

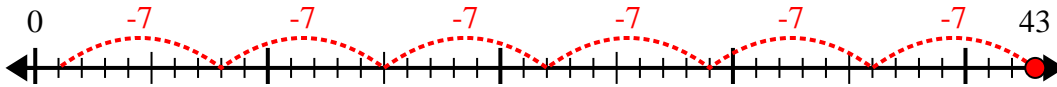
1) $31 \div 6 =$



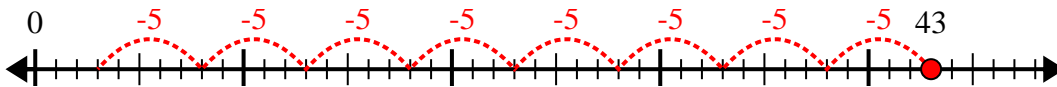
2) $33 \div 4 =$



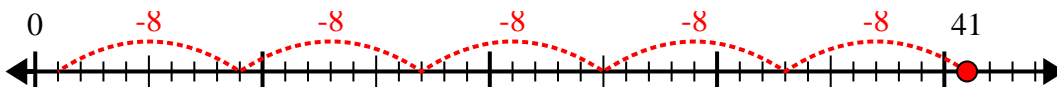
3) $43 \div 7 =$



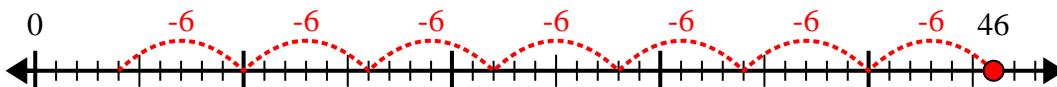
4) $43 \div 5 =$



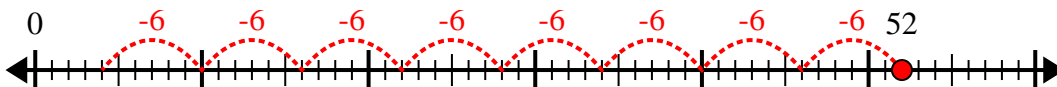
5) $41 \div 8 =$



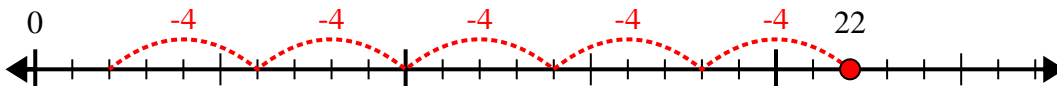
6) $46 \div 6 =$



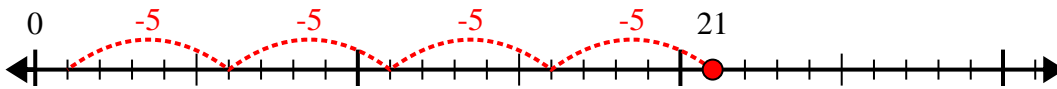
7) $52 \div 6 =$



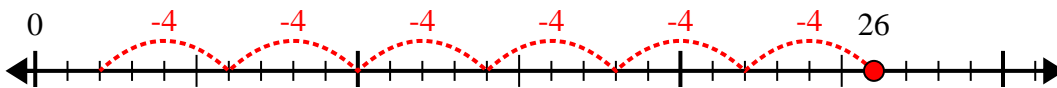
8) $22 \div 4 =$



9) $21 \div 5 =$



10) $26 \div 4 =$



Answers

1. 5r1

2. 8r1

3. 6r1

4. 8r3

5. 5r1

6. 7r4

7. 8r4

8. 5r2

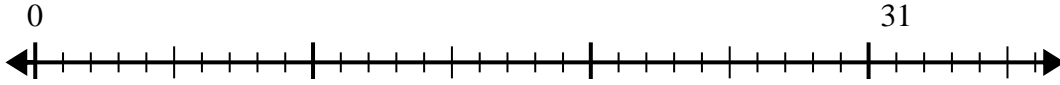
9. 4r1

10. 6r2

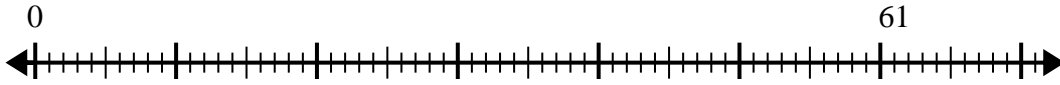


Use the number line to solve the division problem.

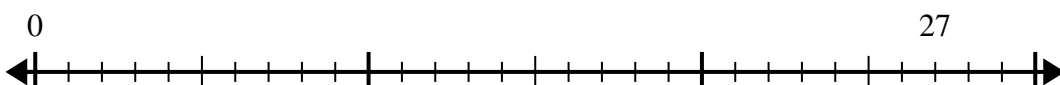
1) $31 \div 8 =$
0



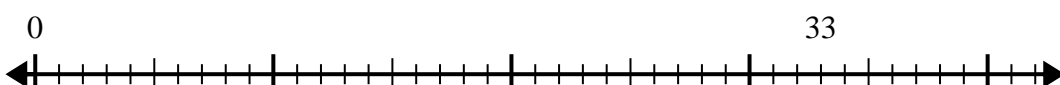
2) $61 \div 8 =$
0



3) $27 \div 4 =$
0



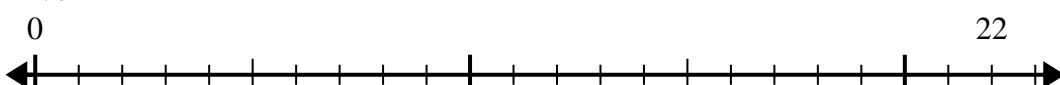
4) $33 \div 4 =$
0



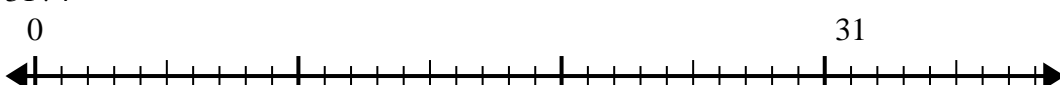
5) $55 \div 8 =$
0




6) $22 \div 7 =$
0



7) $31 \div 4 =$
0



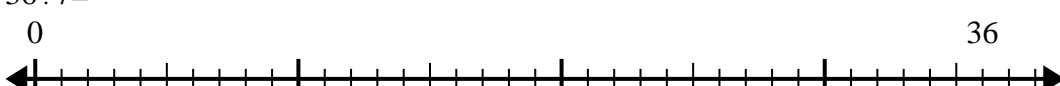
8) $14 \div 4 =$
0



9) $33 \div 7 =$
0



10) $36 \div 7 =$
0



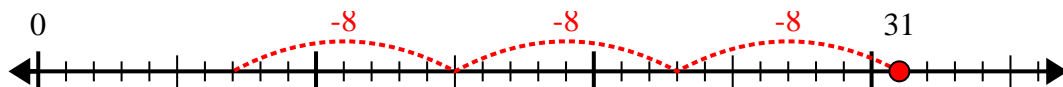
Answers

- 1. _____
- 2. _____
- 3. _____
- 4. _____
- 5. _____
- 6. _____
- 7. _____
- 8. _____
- 9. _____
- 10. _____

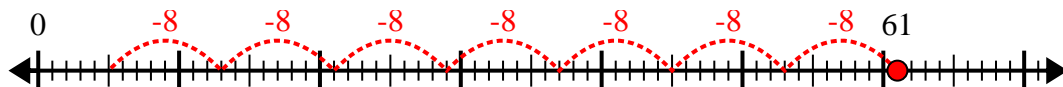


Use the number line to solve the division problem.

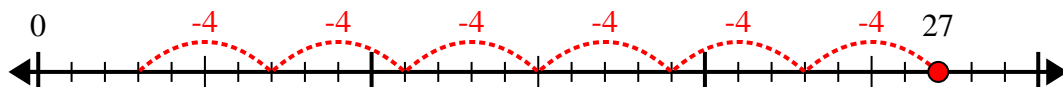
1) $31 \div 8 =$



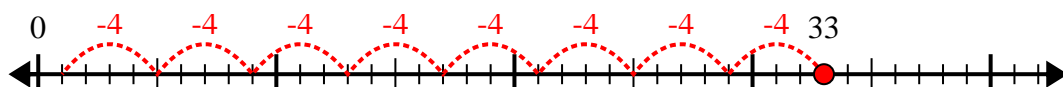
2) $61 \div 8 =$



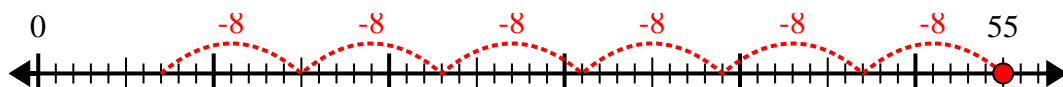
3) $27 \div 4 =$



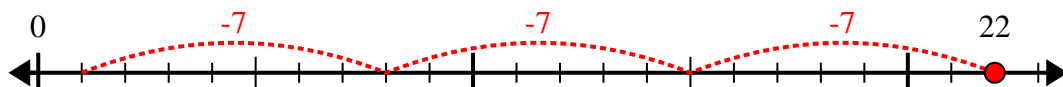
4) $33 \div 4 =$



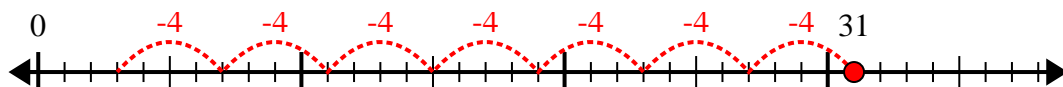
5) $55 \div 8 =$



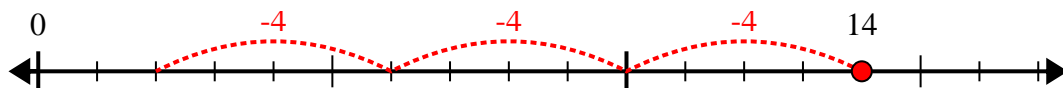
6) $22 \div 7 =$



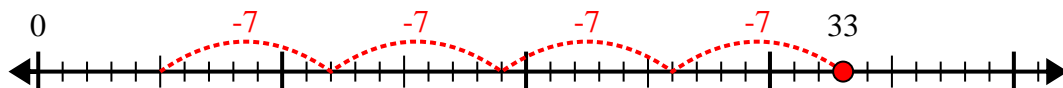
7) $31 \div 4 =$



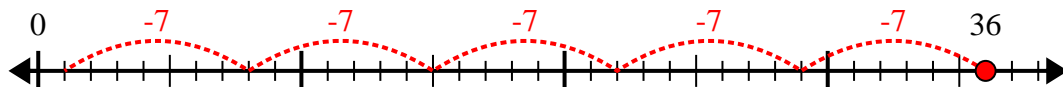
8) $14 \div 4 =$



9) $33 \div 7 =$



10) $36 \div 7 =$



Answers

1. 3r7

2. 7r5

3. 6r3

4. 8r1

5. 6r7

6. 3r1

7. 7r3

8. 3r2

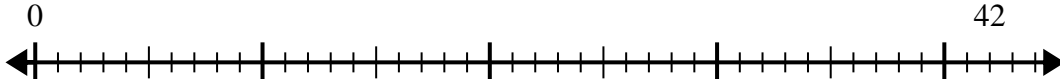
9. 4r5

10. 5r1

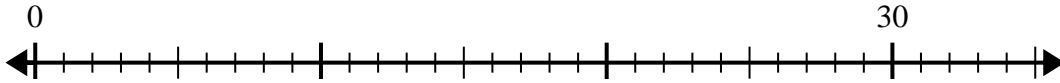


Use the number line to solve the division problem.

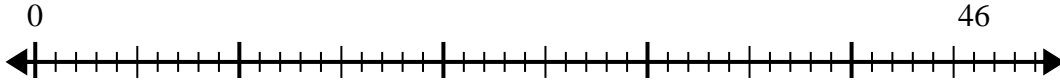
1) $42 \div 5 =$
0



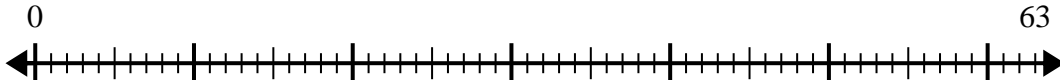
2) $30 \div 4 =$
0



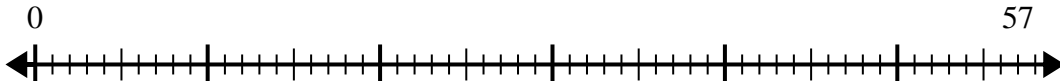
3) $46 \div 6 =$
0



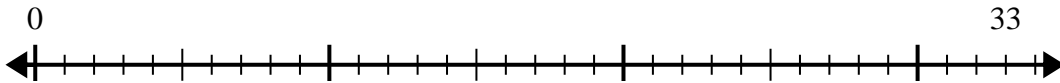
4) $63 \div 8 =$
0



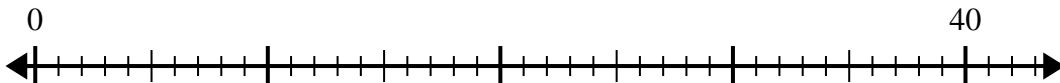
5) $57 \div 7 =$
0



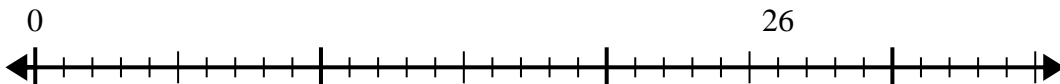
6) $33 \div 4 =$
0



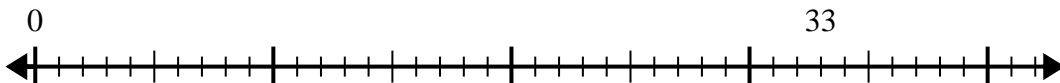
7) $40 \div 7 =$
0



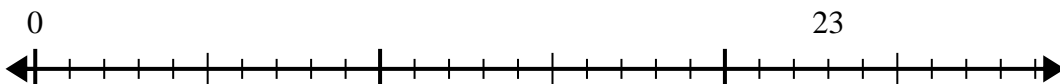
8) $26 \div 8 =$
0



9) $33 \div 5 =$
0



10) $23 \div 7 =$
0



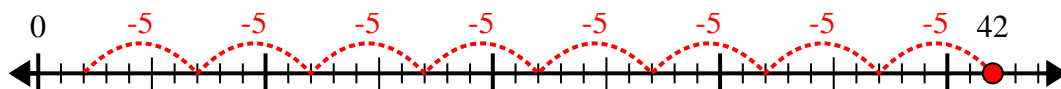
Answers

1. _____
2. _____
3. _____
4. _____
5. _____
6. _____
7. _____
8. _____
9. _____
10. _____

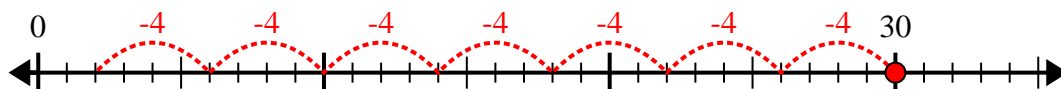


Use the number line to solve the division problem.

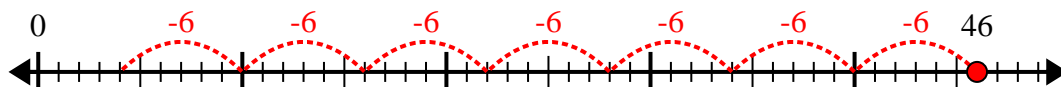
1) $42 \div 5 =$



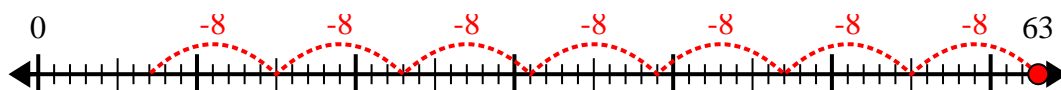
2) $30 \div 4 =$



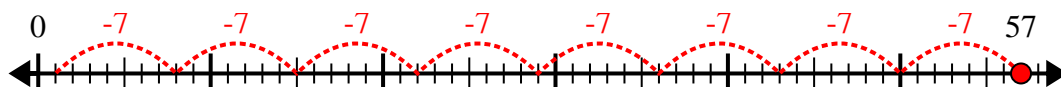
3) $46 \div 6 =$



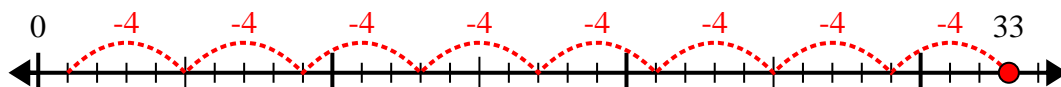
4) $63 \div 8 =$



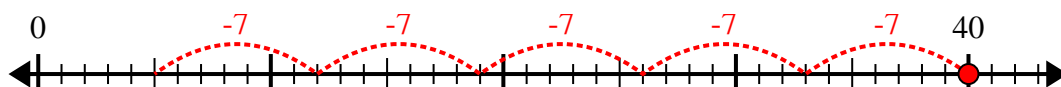
5) $57 \div 7 =$



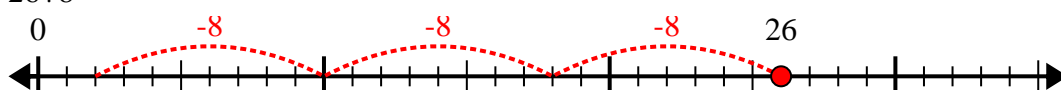
6) $33 \div 4 =$



7) $40 \div 7 =$



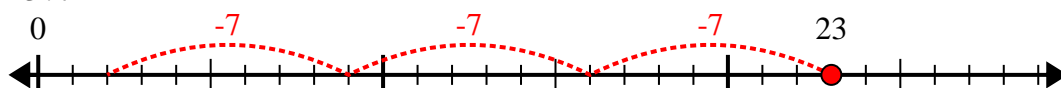
8) $26 \div 8 =$



9) $33 \div 5 =$



10) $23 \div 7 =$



Answers

1. 8r2

2. 7r2

3. 7r4

4. 7r7

5. 8r1

6. 8r1

7. 5r5

8. 3r2

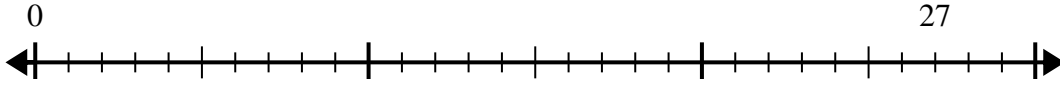
9. 6r3

10. 3r2

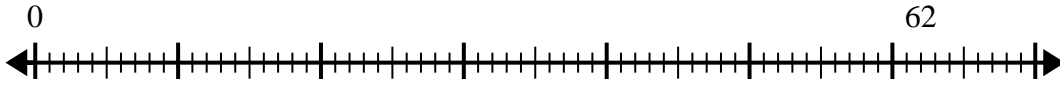


Use the number line to solve the division problem.

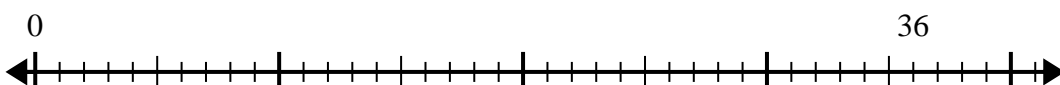
1) $27 \div 4 =$
0



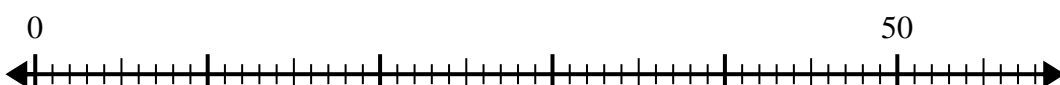
2) $62 \div 8 =$
0



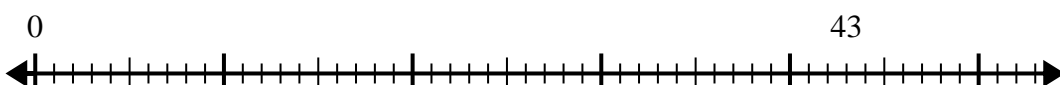
3) $36 \div 5 =$
0



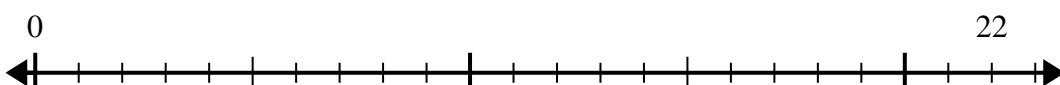
4) $50 \div 8 =$
0



5) $43 \div 6 =$
0



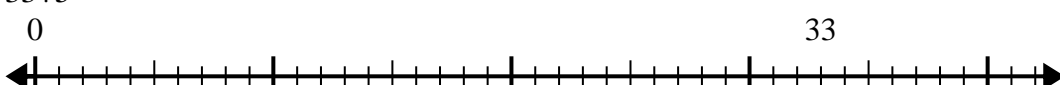
6) $22 \div 5 =$
0



7) $52 \div 6 =$
0



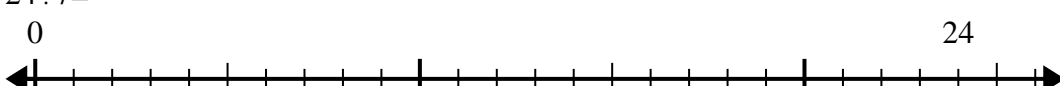
8) $33 \div 5 =$
0



9) $34 \div 7 =$
0



10) $24 \div 7 =$
0



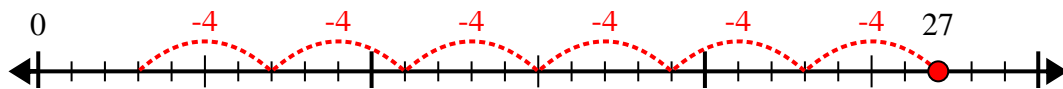
Answers

- 1. _____
- 2. _____
- 3. _____
- 4. _____
- 5. _____
- 6. _____
- 7. _____
- 8. _____
- 9. _____
- 10. _____

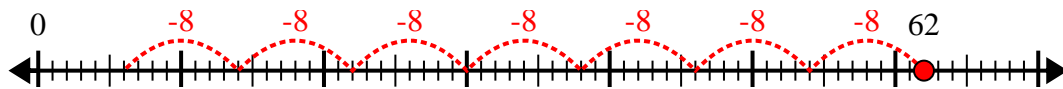


Use the number line to solve the division problem.

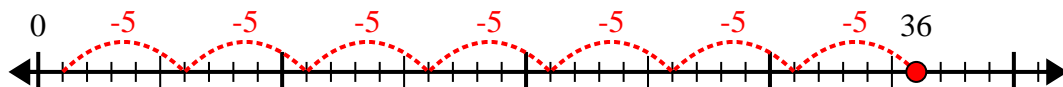
1) $27 \div 4 =$



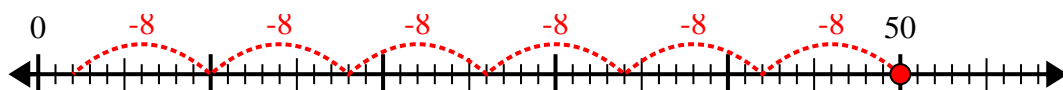
2) $62 \div 8 =$



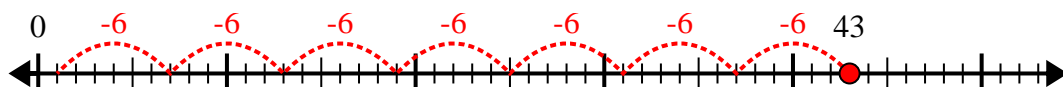
3) $36 \div 5 =$



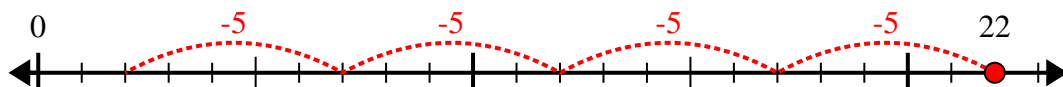
4) $50 \div 8 =$



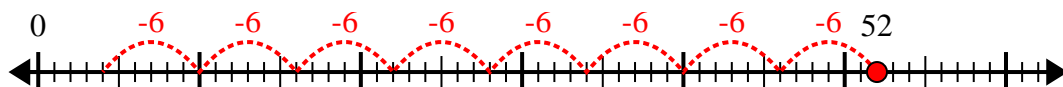
5) $43 \div 6 =$



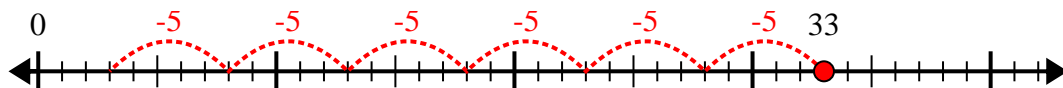
6) $22 \div 5 =$



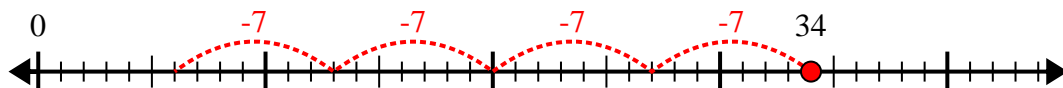
7) $52 \div 6 =$



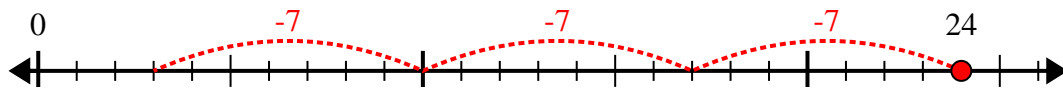
8) $33 \div 5 =$



9) $34 \div 7 =$



10) $24 \div 7 =$



Answers

1. 6r3

2. 7r6

3. 7r1

4. 6r2

5. 7r1

6. 4r2

7. 8r4

8. 6r3

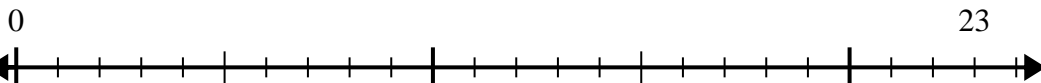
9. 4r6

10. 3r3

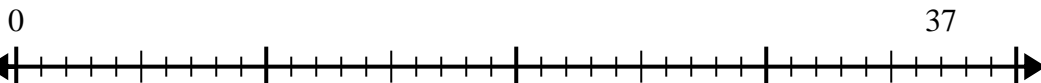


Use the number line to solve the division problem.

1) $23 \div 4 =$



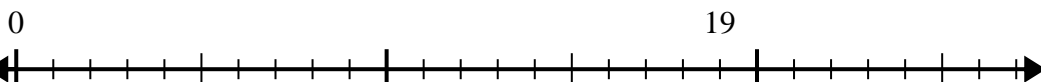
2) $37 \div 8 =$



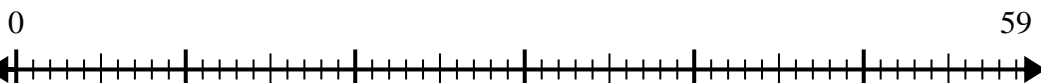
3) $15 \div 4 =$



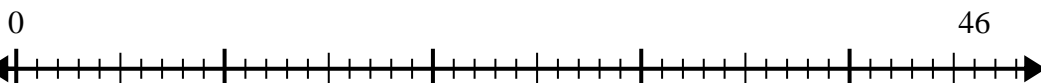
4) $19 \div 6 =$



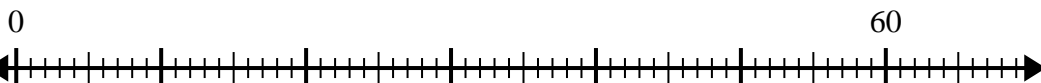
5) $59 \div 8 =$



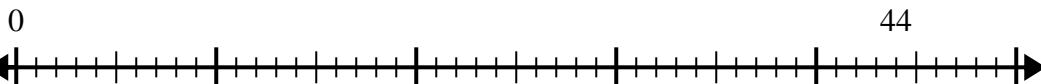
6) $46 \div 7 =$



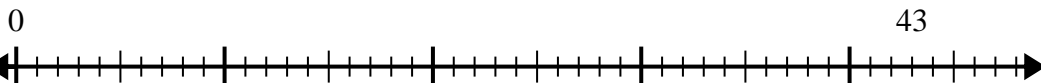
7) $60 \div 7 =$



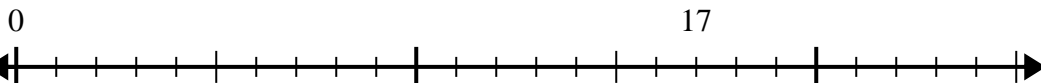
8) $44 \div 6 =$



9) $43 \div 8 =$



10) $17 \div 5 =$



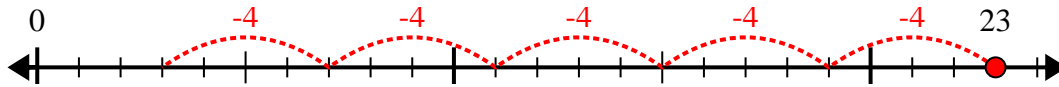
Answers

1. _____
2. _____
3. _____
4. _____
5. _____
6. _____
7. _____
8. _____
9. _____
10. _____

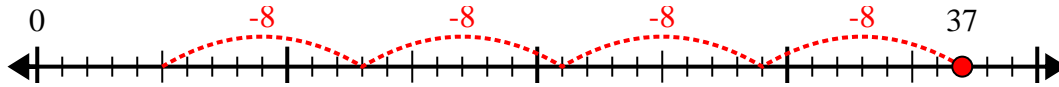


Use the number line to solve the division problem.

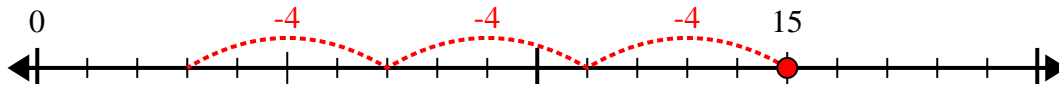
1) $23 \div 4 =$



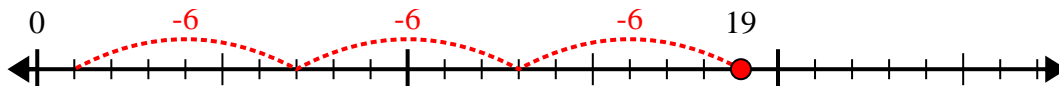
2) $37 \div 8 =$



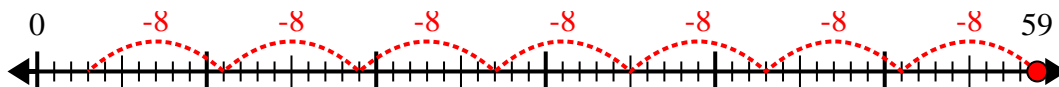
3) $15 \div 4 =$



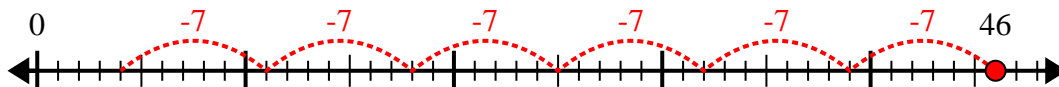
4) $19 \div 6 =$



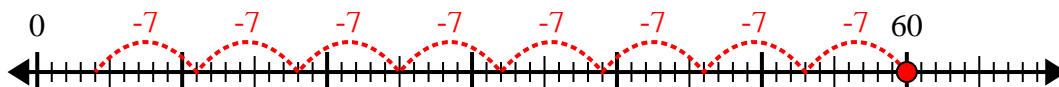
5) $59 \div 8 =$



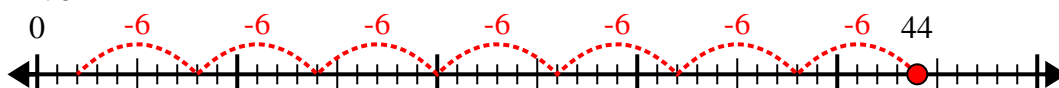
6) $46 \div 7 =$



7) $60 \div 7 =$



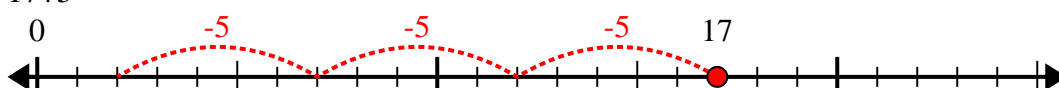
8) $44 \div 6 =$



9) $43 \div 8 =$



10) $17 \div 5 =$



Answers

1. 5r3

2. 4r5

3. 3r3

4. 3r1

5. 7r3

6. 6r4

7. 8r4

8. 7r2

9. 5r3

10. 3r2